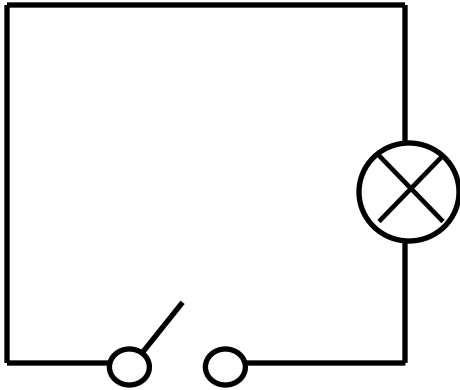


Make the circuit work

Circuit Diagram #1



What are the components in this circuit?

Will electricity flow through this circuit?

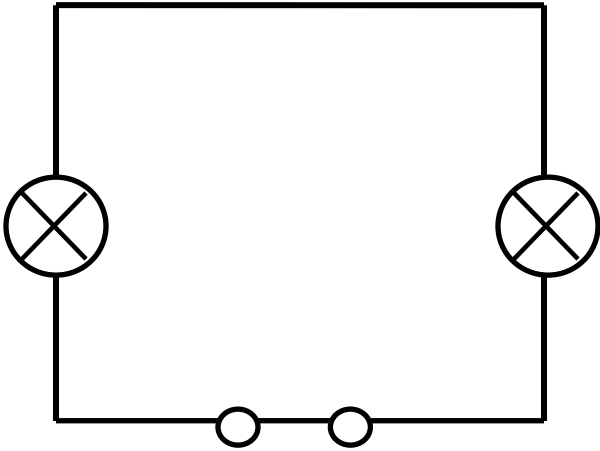
Yes No

What is missing from this circuit to make it work?

Draw a diagram to complete the circuit that will allow the electricity to flow.

A large, empty rounded rectangular box with a thick black border, intended for the student to draw a complete circuit diagram.

Circuit Diagram #2



What are the components in this circuit?

Will electricity flow through this circuit?

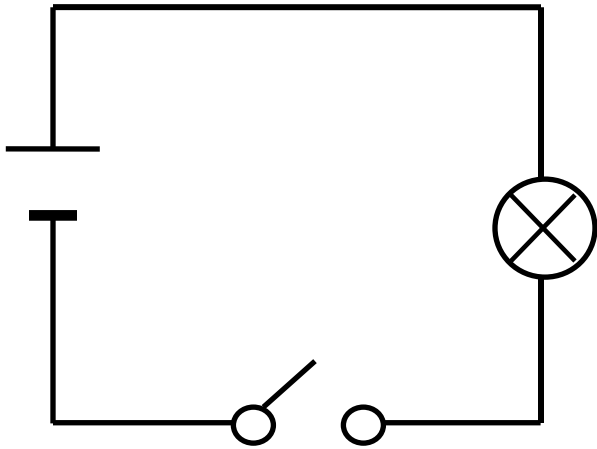
Yes No

What is missing from this circuit to make it work?

Draw a diagram to complete the circuit that will allow the electricity to flow.



Circuit Diagram #3



What are the components in this circuit?

Will electricity flow through this circuit?

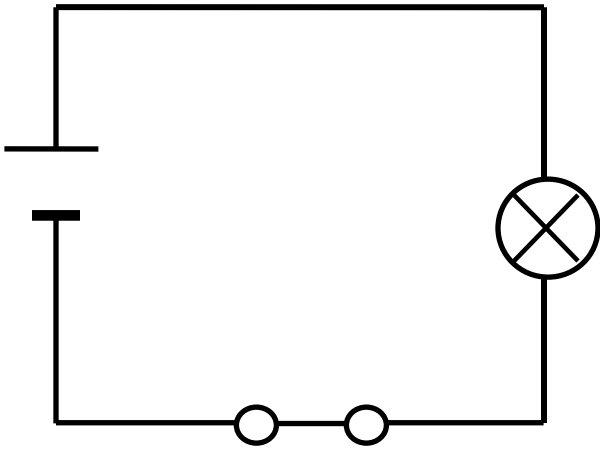
Yes No

What is missing from this circuit to make it work?

Draw a diagram to complete the circuit that will allow the electricity to flow.

A large, empty rounded rectangular box with a thick black border, intended for the student to draw a completed circuit diagram.

Circuit Diagram #4



What are the components in this circuit?

Will electricity flow through this circuit?

Yes No

What is missing from this circuit to make it work?

Draw a diagram to complete the circuit that will allow the electricity to flow.